

3.06.20

What comes before

TO

TO

10

10

15

15

11

11

13

13

14

14

12

12

HW
3-6-20

What comes before

TO

TO

11

10

14



12

15





Same And Different



Circle the pictures that are **same**.



Tick (✓) the pictures that are **different**.





Count and circle the correct numbers.

6 10 8

12 16 8

7 8 9

9 8 10

11 14 16

12 16 14

12 10 13

20 19 16